



# Primavera


Fai la moltiplicazione e scopri quante api ci sono in ogni riquadro.




$$3 \text{ (API)} \times 3 \text{ (ALVEARI)} = \underline{\hspace{2cm}}$$




$$4 \text{ (API)} \times 2 \text{ (ALVEARI)} = \underline{\hspace{2cm}}$$




$$2 \text{ (API)} \times 2 \text{ (ALVEARI)} = \underline{\hspace{2cm}}$$



$$5 \text{ (API)} \times 5 \text{ (ALVEARI)} = \underline{\hspace{2cm}}$$



$$4 \text{ (API)} \times 4 \text{ (ALVEARI)} = \underline{\hspace{2cm}}$$



$$3 \text{ (API)} \times 4 \text{ (ALVEARI)} = \underline{\hspace{2cm}}$$